

USN

--	--	--	--	--	--	--	--	--	--

10MAT31

Third Semester B.E. Degree Examination, Dec.2016/Jan.2017
Engineering Mathematics – III

Time: 3 hrs.

Max. Marks:100

Note: Answer FIVE full questions, selecting at least TWO questions from each part.

PART – A

- 1 a. Obtain the Fourier series in $(-\pi, \pi)$ for $f(x) = x \cos x$. (07 Marks)
 b. Obtain the Fourier half range sine series,

$$f(x) = \begin{cases} \frac{1}{4} - x & \text{in } 0 < x < \frac{1}{2} \\ x - \frac{3}{4} & \text{in } \frac{1}{2} < x < 1 \end{cases}$$

(07 Marks)

- c. Obtain the constant term and the coefficients of the first cosine and sine terms in the Fourier expansion of y from the table. (06 Marks)

x	0	1	2	3	4	5
y	9	18	24	28	26	20

- 2 a. Find the Fourier transforms of $f(x) = \begin{cases} 1 - x^2 & \text{for } |x| < 1 \\ 0 & \text{for } |x| \geq 1 \end{cases}$ and hence evaluate

$$\int_0^{\infty} \frac{x \cos x - \sin x}{x^3} \cos \frac{x}{2} dx$$

(07 Marks)

- b. Find the Fourier sine transform of $e^{-|x|}$. (07 Marks)
 c. Find the inverse Fourier sine transform of $\hat{f}_s(\alpha) = \frac{e^{-a\alpha}}{\alpha}$, $a > 0$. (06 Marks)

- 3 a. Solve the wave equation $u_{tt} = c^2 u_{xx}$ given that $u(0, t) = 0 = u(2l, t)$, $u(x, 0) = 0$ and $\frac{\partial u}{\partial t}(x, 0) = a \sin^3 \frac{\pi x}{2l}$. (07 Marks)

- b. Solve the boundary value problem $\frac{\partial u}{\partial t} = c^2 \frac{\partial^2 u}{\partial x^2}$ $0 < x < l$, $\frac{\partial u}{\partial x}(0, t) = 0$, $\frac{\partial u}{\partial x}(l, t) = 0$, $u(x, 0) = x$. (07 Marks)

- c. Obtain the D'Alembert's solution of the wave equation, $u_{tt} = C^2 u_{xx}$ subject to the conditions $u(x, 0) = f(x)$ and $\frac{\partial u}{\partial t}(x, 0) = 0$. (06 Marks)

- 4 a. Fit a parabola $y = a + bx + cx^2$ for the data: (07 Marks)

x	0	1	2	3	4
y	1	1.8	1.3	2.5	2.3

- b. Solve by using graphical method the L.P.P.
 Minimize $z = 30x + 20y$
 Subject to the constraints: $x - y \leq 1$
 $x + y \geq 3$, $y \leq 4$
 and $x \geq 0$, $y \geq 0$ (07 Marks)

- c. Maximize $z = 3x + 4y$
 subject to the constraints $2x + y \leq 40$, $2x + 5y \leq 180$,
 $x \geq 0$, $y \geq 0$ using simplex method. (06 Marks)

Important Note : 1. On completing your answers, compulsorily draw diagonal cross lines on the remaining blank pages.
 2. Any revealing of identification, appeal to evaluator and /or equations written eg, 42+8 = 50, will be treated as malpractice.

PART – B

- 5 a. Find the fourth root of 12 correct to three decimal places by using regula Falsi method. (07 Marks)
- b. Solve $9x - 2y + z = 50$, $x + 5y - 3z = 18$, $-2x + 2y + 7z = 19$ by relaxation method obtaining the solution correct to two decimal places. (07 Marks)

- c. Find the largest eigen value and the corresponding eigen vector of, $\begin{bmatrix} 2 & -1 & 0 \\ -1 & 2 & -1 \\ 0 & -1 & 2 \end{bmatrix}$ by using power method by taking initial vector as $[1 \ 1 \ 1]^T$. (06 Marks)

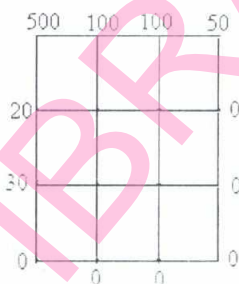
- 6 a. The table gives the values of $\tan x$ for $0.10 \leq x \leq 0.30$ (07 Marks)

x	0.10	0.15	0.20	0.25	0.30
tanx	0.1003	0.1511	0.2027	0.2553	0.3093

- b. Using Newton's forward and backward interpolation formula, calculate the increase in population from the year 1955 to 1985. The population in a town is given by. (07 Marks)

Year	1951	1961	1971	1981	1991
Population in thousands	19.96	39.65	58.81	77.21	94.61

- c. Evaluate $\int_0^1 \frac{dx}{1+x}$ taking seven ordinates by applying Simpson's $\frac{3}{8}$ rule. Hence deduce the value of $\log_e 2$. (06 Marks)
- 7 a. Solve the Laplace's equation $u_{xx} + u_{yy} = 0$, given that (07 Marks)



- b. Solve $\frac{\partial^2 u}{\partial t^2} = 4 \frac{\partial^2 u}{\partial x^2}$ subject to $u(0, t) = 0$; $u(4, t) = 0$; $u(x, 0) = x(4 - x)$. Take $h = 1$, $K = 0.5$ upto Four steps. (07 Marks)
- c. Solve the equation $\frac{\partial u}{\partial t} = \frac{\partial^2 u}{\partial x^2}$ subject to the condition $u(x, 0) = \sin \pi x$, $0 \leq x \leq 1$, $u(0, t) = u(1, t) = 0$ using Schmidt's method. Carry out computations for two levels, taking $h = \frac{1}{3}$, $K = \frac{1}{36}$. (06 Marks)
- 8 a. Find the z-transform of, (i) $\cosh n\theta$ (ii) $\sinh n\theta$ (07 Marks)
- b. Obtain the inverse z-transform of, $\frac{4z^2 - 2z}{z^3 - 5z^2 + 8z - 4}$. (07 Marks)
- c. Solve the difference equation, $y_{n+2} + 2y_{n+1} + y_n = n$ with $y_0 = y_1 = 0$ using z-transforms. (06 Marks)

* * * * *

Third Semester B.E. Degree Examination, Dec.2016/Jan.2017
Analog Electronic Circuits

Time: 3 hrs.

Max. Marks:100

Note: Answer FIVE full questions, selecting at least TWO questions from each part.

PART – A

- 1 a. Explain the static and dynamic resistance of the diode. (04 Marks)
 b. For the circuit shown in Fig. Q1 (b). Find I_D , V_1 , V_2 and V_0 . Assume silicon diode. (08 Marks)

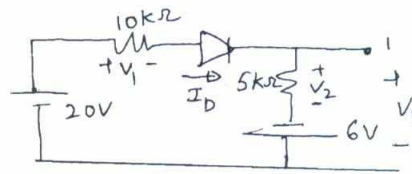


Fig. Q1 (b)

- c. For the clipping circuit shown in Fig. Q1 (c). Draw the transfer characteristics and output voltage waveforms. Assume silicon diodes. (08 Marks)

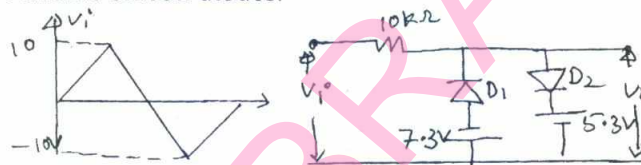


Fig. Q1 (c)

- 2 a. For an emitter bias circuit shown in Fig. Q2 (a). Find
 i) Quiescent values of base and collector currents. ii) Quiescent values of V_{CE} .
 iii) Voltage at base to ground and collector to ground. iv) Base to collector voltage.
 Assume $V_{BE} = 0.7\text{ V}$, $\beta = 60$ (10 Marks)

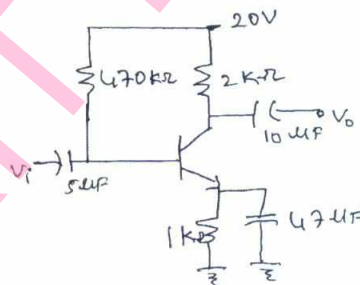


Fig. Q2 (a)

- b. For the voltage divider bias configuration. Derive expression for I_C and V_{CE} and expression for collector current when it is in saturation. Comment on stability factor. (10 Marks)
- 3 a. Describe how transistor behaves as switch. Also describe transistor switching time. (06 Marks)
 b. For common base npn transistor configuration with $I_E = 4\text{ mA}$, $\alpha = 0.98$ and ac signal of 2 mV applied between base and emitter terminals. Determine:
 i) Input impedance ii) The voltage gain of load $0.56\text{ K}\Omega$ is connected to output terminals.
 iii) Output impedance. iv) Current gain. (06 Marks)
 c. Explain common emitter fixed bias configuration. Derive expression for the input impedance, output impedance, voltage gain and current gain. (08 Marks)

- 4 a. Explain low frequency response of BJT amplifier. Derive the expression for lower cut-off frequency considering the effect of input coupling capacitor C_S . (10 Marks)
- b. For the circuit shown in Fig. Q4 (b). Calculate (i) f_{Hi} and f_{Ho} . (ii) f_{β} and f_T
- Take $C_{bc} = 35$ P.F, $C_{bc} = 5$ P.F, $C_{ce} = 1$ PF, $C_{wi} = 6$ PF, $C_{wo} = 10$ P.F, $\beta = 100$ and $V_0 = \infty$. (10 Marks)

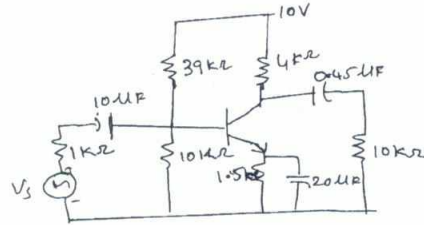


Fig. Q4 (b)

PART - B

- 5 a. Explain Darlington emitter follower. Draw the equivalent circuit. Derive expression for input impedance (Z_i), current gain (A_i), Voltage gain A_V and output impedance (Z_o). (10 Marks)
- b. Determine the voltage gain, input and output impedance with voltage series feedback having $A = -100$, $R_i = 10$ KΩ, $R_o = 20$ KΩ for feedback factor $\beta = -0.1$. (06 Marks)
- c. Discuss the advantages of negative feedback. (04 Marks)
- 6 a. Describe FET amplifier with voltage series feedback. Derive the expression for gain. (10 Marks)
- b. Explain the principles of class B amplifier operation. Derive expression for (i) input dc power (ii) Output ac power (iii) η -efficiency (iv) power dissipated by output transistor. (10 Marks)
- 7 a. Write the basic principle of oscillator. Also state the conditions for oscillation. (04 Marks)
- b. Describe any one type of tuned oscillator with relevant diagram. Write expression for frequency of oscillations. (08 Marks)
- c. RC phase shift oscillator $R_C = 5$ kΩ and $R = 3.3$ kΩ. Find the range of values of capacitor if it is required to vary frequency from 100 Hz to 20 kHz. (08 Marks)
- 8 a. Explain common gate JFET configuration with relevant circuit diagram. Draw equivalent circuit. Derive expression for Z_i , Z_o and A_V . (08 Marks)
- b. The self biased configuration of JFET has operating point defined by $V_{GSQ} = -2.6$ V and $I_{DQ} = 22.6$ mA and $I_{DSS} = 8$ mA and $V_p = -6$ V the value of $Y_{OS} = 20$ μS as shown in Fig.Q8 (b). Find (i) g_m (ii) r_d (iii) Z_i (iv) Z_o (06 Marks)

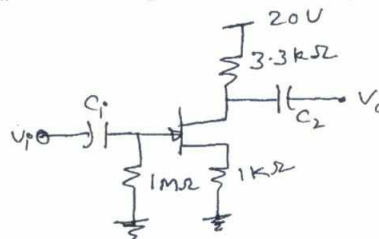


Fig. Q8 (b)

- c. Differentiate depletion type MOSFET and enhancement type MOSFET. (06 Marks)

USN

--	--	--	--	--	--	--	--	--	--	--	--	--	--	--	--	--	--	--	--

10ES33

Third Semester B.E. Degree Examination, Dec.2016/Jan.2017
Logic Design

Time: 3 hrs.

Max. Marks: 100

**Note: Answer any FIVE full questions, selecting
atleast TWO questions from each part.**

PART – A

- 1 a. A logic circuit has 4 inputs P, Q, R, S and 2 outputs Y_1, Y_2 .
 - i) Y_1 is '1' when majority of inputs are '1' (equal numbers of '0' and '1' are treated don't care)
 - ii) Y_2 is '1' when two adjacent inputs are '1' (P and S are treated adjacent)
 Design the circuit using NAND gates only. (12 Marks)
- b. Determine minimal POS and SOP for $f(E, F, G, H) = \pi(0, 1, 2, 7, 11, 13) \cdot d(4, 5, 8, 10, 14)$. (08 Marks)
- 2 a. Using Quine – McCluskey technique simplify the Boolean expression.
 $f(A, B, C, D) = \Sigma(0, 5, 7, 8, 9, 10, 11, 14, 15)$. (10 Marks)
- b. Simplify and realize the given function using MEV technique taking least significant variable as map entered variable.
 $f(a, b, c, d, e) = \Sigma(1, 3, 4, 6, 9, 11, 12, 14, 17, 19, 20, 22, 25, 27, 28, 30)$. (10 Marks)
- 3 a. With the help of logic diagram, truth table and circuit diagram, explain 3-to-8 line decoder with active low outputs. Using the same implement the functions :
 $f_1 = \pi(0, 3, 5, 6)$
 $f_2 = \pi(2, 3, 4, 5, 7)$. (10 Marks)
- b. What are the limitations of basic encoder? Design a 4-2 priority encoder with validity output. (10 Marks)
- 4 a. Explain how look Ahead carry adder speeds up operation of addition over basic parallel adder. (10 Marks)
- b. Implement $f(A, B, C, D) = \Sigma m(0, 1, 3, 4, 8, 9, 15)$ using i) 74151 (8-1 MUX) ii) 74153 (dual 4-1 mux). (06 Marks)
- c. Define Dmux, design 1-4 Dmux. (04 Marks)

PART – B

- 5 a. Explain the application of SR Latch as switch de-bouncer. (06 Marks)
- b. Explain the operation of asynchronous inputs of flip-flop with waveforms. (06 Marks)
- c. Write the logic circuit and truth table of D and T FFS. Draw the output waveforms for the input shown for :
 i) D latch ii) Gated D latch iii) +ve edge TFF iv) -ve edge TFF. (08 Marks)




Fig. Q5(c)

Important Note : 1. On completing your answers, compulsorily draw diagonal cross lines on the remaining blank pages.
2. Any revealing of identification, appeal to evaluator and /or equations written eg, 42+8 = 50, will be treated as malpractice.

- 6 a. Design a mod16 asynchronous down counter using D flip-flops. (10 Marks)
 b. Explain the operation of : i) parallel in serial out shift register ii) twisted ring counter. (10 Marks)
- 7 a. Differentiate between Moore and Mealy models. (05 Marks)
 b. Construct the transition table, state table and state diagram for the Moore sequential circuit shown. (15 Marks)

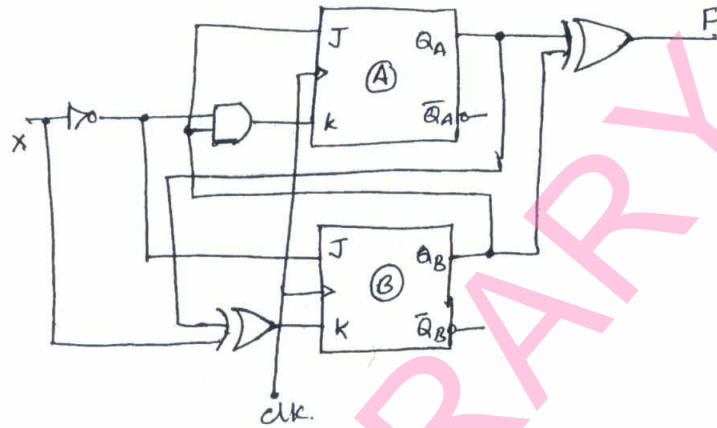


Fig. Q7(b)

- 8 a. Explain lockout condition. How do you eliminate it? Design a synchronous counter for :
 $4 \rightarrow 6 \rightarrow 7 \rightarrow 3 \rightarrow 1 \rightarrow 4$.
 Avoid lockout condition. Use JK flip-flop. (12 Marks)
- b. A sequential circuit has one input and one output. The state diagram is as shown in Fig. Q8(b). Design the circuit using D FF. (08 Marks)

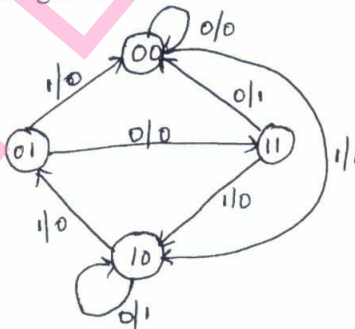


Fig. Q8(b)

Third Semester B.E. Degree Examination, Dec.2016/Jan.2017

Network Analysis

Time: 3 hrs.

Max. Marks:100

Note: 1. Answer any FIVE full questions, selecting atleast TWO questions from each part.
2. Missing data may be assumed suitably.

PART - A

- 1 a. Using source transformation and shifting, obtain the power consumed in 8Ω resistance of the network shown in Fig.Q1(a). (06 Marks)
- b. Determine all the node voltages of the circuit shown in Fig.Q1(b) using nodal analysis. (06 Marks)
- c. Find the value of V_s such that the current in $-j11\Omega$ is zero, use mesh analysis assuming all the loop currents are in clockwise directions. Refer Fig. 1(c). (08 Marks)

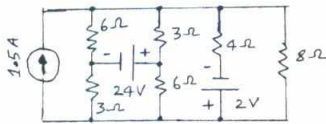


Fig. Q1(a)

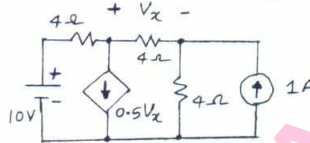


Fig. Q1(b)

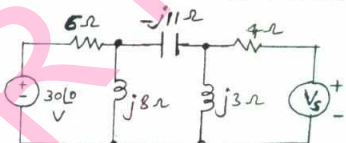


Fig. Q1(c)

- 2 a. Draw the dual of the network shown in Fig. 2(a). Write the corresponding equations for both networks. (08 Marks)
- b. Draw the graph of the network shown in Fig. Q2(b), select links as the branches containing voltage sources. Write tie-set schedule and there from obtain all the branch currents and voltages. (12 Marks)

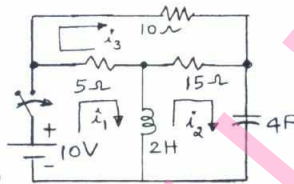


Fig.Q2(a)

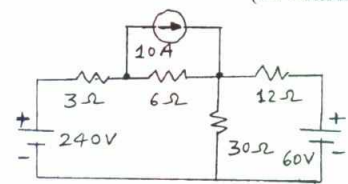


Fig. Q2(b)

- 3 a. Determine the current and voltage across 4Ω resistance of the network shown in Fig. Q3(a), using superposition theorem. (06 Marks)
- b. Apply Millman's theorem to find V_0 and I_0 for the circuit shown in Fig. 3(b). (08 Marks)
- c. State and explain the reciprocity theorem. (06 Marks)

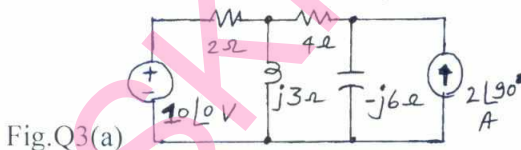


Fig.Q3(a)

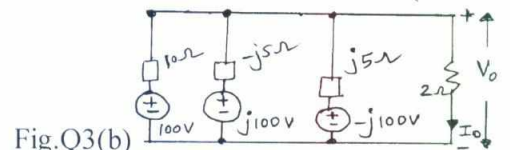


Fig.Q3(b)

- 4 a. A linear bilateral network consisting of passive elements is shown in Fig. 4(a), with $V_s = 10V$, V_{ab} is 5V. If 'ab' is shorted, $I_{ab} = 1A$ for $V_s = 15V$. Determine the current when $R_{ab} = 2.5\Omega$ with $V_s = 12V$. (04 Marks)
- b. Determine the Norton's equivalent of the circuit shown in Fig. 4(b). (08 Marks)
- c. What value of impedance Z_L results in maximum power transfer condition for the network shown in Fig. Q4(c)? Also determine the corresponding power. (08 Marks)




Fig. Q4(a)

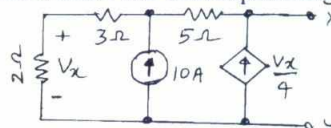


Fig. Q4(b)

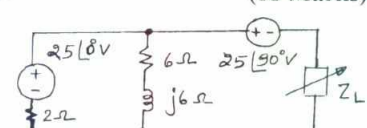


Fig. Q4(c)

Important Note : 1. On completing your answers, compulsorily draw diagonal cross lines on the remaining blank pages.
2. Any revealing of identification, appeal to evaluator and /or equations written eg, 42+8 = 50, will be treated as malpractice.

PART – B

- 5 a. A series R – L – C circuit is fed with 50 V rms supply. At resonance, the current through the circuit is 25A and the voltage across inductor is 1250 volts. If $G = 4 \mu\text{F}$, determine the values of R, L Q, resonant frequency, bandwidth and half power frequencies. (12 Marks)
 Obtain the condition for resonance of elements as shown in Fig. 5(b). Derive the expression
 b. for total impedance at resonance. (08 Marks)

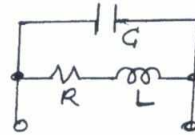


Fig. Q5(b)

- 6 a. The switch 'K' in the circuit shown in Fig. 6(a) is in open position for a long time and at time $t = 0$, it is closed. Determine the values of i_1 and i_2 along with their first and second derivatives at $t = 0+$. (10 Marks)
 b. The switch 'S' is changed from position 1 to 2 at time $t = 0$. The circuit was under steady state before this action. Determine the value of v and i at $t = 0+$ and their first and second derivatives also. Refer Fig. 6(b). (10 Marks)

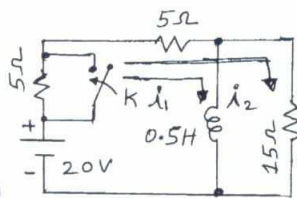


Fig. Q6(a)

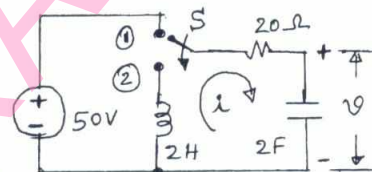


Fig. Q6(b)

- 7 a. Using Laplace transformation method obtain the expression for $i(t)$. The capacitor charge is zero initially. Also obtain the expression for capacitor voltage in 'S' domain, refer Fig. 7(a). (10 Marks)
 b. Using standard waveforms, express the waveform given (periodic) in Fig. 7(b) and obtain its Laplace transform. (10 Marks)

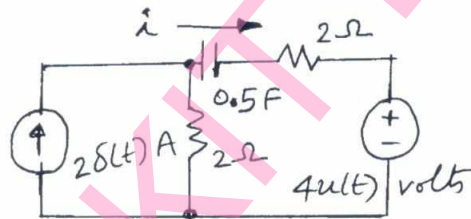


Fig. Q7(a)

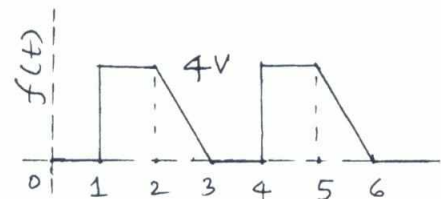


Fig. Q7(b)

- 8 a. Determine the Y-parameters of the network shown in Fig. Q8(a), (10 Marks)
 b. Replace the circuit shown in Fig. 8(b) with its hybrid parameter equivalent network. (10 Marks)

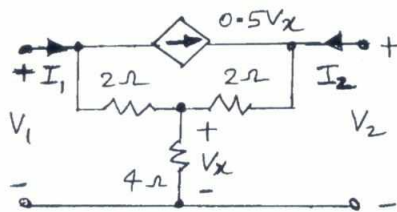


Fig. Q8(a)

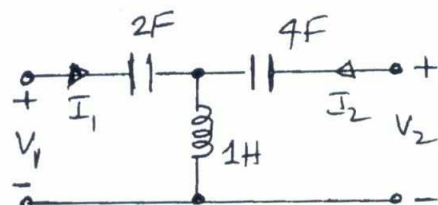


Fig. Q8(b)

USN

--	--	--	--	--	--	--	--	--	--

10IT35

Third Semester B.E. Degree Examination, Dec.2016/Jan.2017
Electronic Instrumentation

Time: 3 hrs.

Max. Marks:100

**Note: Answer any FIVE full questions, selecting
atleast TWO questions from each part.**

PART – A

- 1 a. Discuss briefly : (i) Gross error (ii) Systematic error. (04 Marks)
b. Explain with neat circuit diagram full wave rectifier type AC voltmeter. (08 Marks)
c. Explain the working of true RMS voltmeter, with a neat block diagram. (08 Marks)
- 2 a. Write the advantages of digital instruments over analog instruments. (04 Marks)
b. Explain the ramp type digital voltmeter with the help of a block diagram. (08 Marks)
c. With a neat block diagram explain the digital frequency meter. (08 Marks)
- 3 a. Explain the function of various controls on the front panel of a CRO. (04 Marks)
b. With neat block diagram, explain dual trace oscilloscope. (10 Marks)
c. With the help of basic block diagram explain the working principle of electronic switch. (06 Marks)
- 4 a. Explain the operation of digital storage oscilloscope with the help of a block diagram. (10 Marks)
Mention the advantages. (10 Marks)
b. With a neat block diagram explain the sampling oscilloscope. (10 Marks)

PART – B

- 5 a. Explain in detail the working of sine and square wave generator. (10 Marks)
b. Explain with neat block diagram operating principle of function generator. (10 Marks)
- 6 a. Explain the Wheatstone bridge and derive the balance equation for Wheatstone bridge. (12 Marks)
Mention the limitations. (08 Marks)
b. With a neat block diagram explain the Wagner's earth connection. (08 Marks)
- 7 a. What are the factors to be considered for the selection of better transducer? Explain. (08 Marks)
b. Explain the construction, principle and operation of LVDT. (12 Marks)
- 8 a. Compare LED displays and LCD displays (Any four). (04 Marks)
b. Explain the procedure of measuring power using a Bolometer in a bridge circuit. (10 Marks)
c. Write an explanatory note on signal conditioning. (06 Marks)

* * * * *

Important Note : 1. On completing your answers, compulsorily draw diagonal cross lines on the remaining blank pages.
2. Any revealing of identification, appeal to evaluator and /or equations written eg, 42+8 = 50, will be treated as malpractice.

USN

--	--	--	--	--	--	--	--	--	--	--	--	--	--	--	--	--	--	--	--

10ES36

Third Semester B.E. Degree Examination, Dec.2016/Jan.2017
Field Theory

Time: 3 hrs.

Max. Marks:100

**Note: Answer FIVE full questions, selecting
at least TWO questions from each part.**

PART – A

- 1
 - a. State Coulombs law for the Force between any two point charges and indicate the units of Quantities in the force equation. (06 Marks)
 - b. On the line described by $x = 2m$, $y = -4m$ there is uniform charge distribution of density $\rho_L = 20 \text{ nc/m}$. Determine Electric field at $P(-2, -1, 4)m$. (04 Marks)
 - c. State and prove Gauss – Divergence theorem. (10 Marks)
- 2
 - a. Given the potential field $V = (50x^2yz + 20y^2)$ Volts in free space. Find : i) V at $P(-2, 3, 6)$ ii) \vec{E}_p and iii) \hat{a}_r at P (06 Marks)
 - b. Derive an expression for energy expended by moving a point charge arbitrarily in an uniform electric field. (06 Marks)
 - c. Derive Laplace and Poisson's equations starting from the differential form of Gauss law. Express Laplace equation in all the three co-ordinate systems. (08 Marks)
- 3
 - a. Derive expression for energy stored in a capacitor and an expression after energy density in an electrostatic field. (08 Marks)
 - b. In cylindrical coordinate system planes are insulated along 'z' axis as shown in Fig 3(b). Neglect fringing effect and find expressions for \vec{E} between the planes assuming a potential of 100V for $\phi = \alpha$ and a zero reference at $\phi = 0$. (06 Marks)

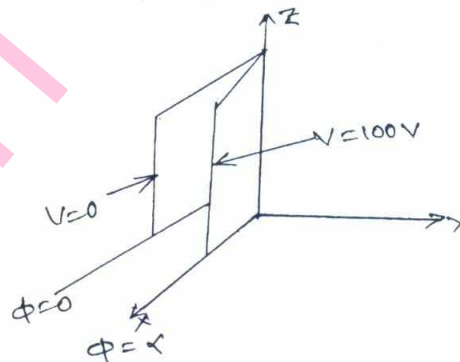


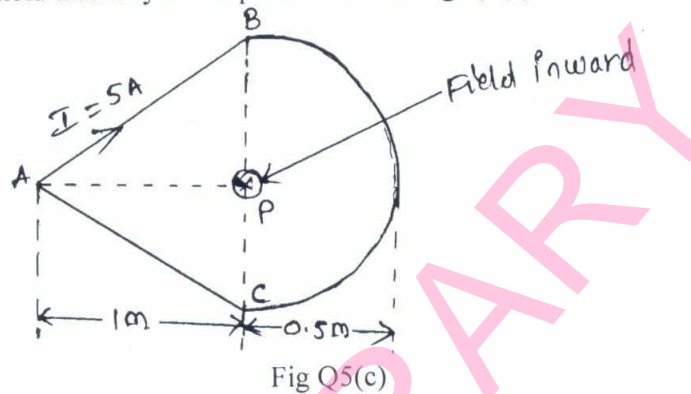
Fig Q3(b)

- c. State and prove uniqueness theorem. (06 Marks)
- 4
 - a. An air cored torroid having a cross sectional area of 6cm^2 and mean radius 15cm is wound uniformly with 500 turns carrying a current of 4A. Determine the magnetic flux density and field intensity of torroid. (06 Marks)
 - b. Derive an expression for Magnetic flux density at any point on the axis of Solenoid. (08 Marks)
 - c. State and explain Amperes circuital law. (06 Marks)

Important Note : 1. On completing your answers, compulsorily draw diagonal cross lines on the remaining blank pages.
2. Any revealing of identification, appeal to evaluator and /or equations written eg, 42+8 = 50, will be treated as malpractice.

PART – B

- 5 a. Explain the concept of scalar and vector magnetic potential. (08 Marks)
 b. Derive the boundary conditions at the interface between two different magnetic materials. (06 Marks)
 c. Find the magnetic field intensity at the point P for the Fig Q5(c) shown below. (06 Marks)



- 6 a. List out Maxwell's equations in point and integral forms for both static and time varying fields. (08 Marks)
 b. Describe the continuity equation of current in differential form. (06 Marks)
 c. Show that conduction current in the wire is equal to the displacement current in the dielectric of a capacitor subjected to a time varying field. (06 Marks)
- 7 a. Explain how uniform plane wave is transverse in nature. Describe the skin depth or depth of penetration. (10 Marks)
 b. A wave propagating in a Lossless dielectric has the Components.
 $\vec{E} = 500 \cos[10^7 t - \beta z] \hat{a}_z$ V/m and $\vec{H} = 1.1 \cos[10^7 t - \beta z] \hat{a}_y$ A/m of the wave is travelling at $V = 0.5C$. Find : i) μ_r ii) ϵ_r iii) β iv) λ v) z . (10 Marks)
- 8 a. Derive the expressions for transmission co-efficient and reflection co-efficient of a uniform plane wave for normal incidence. (10 Marks)
 b. Define SWR and derive the relationship between SWR and reflection coefficient. (10 Marks)

* * * * *

USN

--	--	--	--	--	--	--	--	--	--

MATDIP301

Third Semester B.E. Degree Examination, Dec.2016/Jan.2017
Advanced Mathematics - I

Time: 3 hrs.

Max. Marks:100

Note: Answer any FIVE full questions.

- 1 a. Express the $\frac{3}{1+i} - \frac{1}{2-i} + \frac{1}{1-i}$ in the form of $a + ib$. (06 Marks)
- b. Find the cube roots of $1 - i$. (07 Marks)
- c. Prove that $\left(\frac{1 + \cos \theta + i \sin \theta}{1 + \cos \theta - i \sin \theta}\right)^n = \cos n \theta + i \sin n \theta$. (07 Marks)
- 2 a. Find the n th derivative of $e^{ax} \cos(bx + c)$. (07 Marks)
- b. Find the n th derivative of $\frac{x}{(x-1)(2x+3)}$. (06 Marks)
- c. If $y = a \cos(\log x) + b \sin(\log x)$ prove that $x^2 y_{n+2} + (2n+1)xy_{n+1} + (n^2+1)y_n = 0$. (07 Marks)
- 3 a. With usual notations P.T $\tan \phi = \frac{rd\theta}{dr}$. (06 Marks)
- b. Find the angle between the pairs of curves
 $r = a \log \theta$ $r = \frac{a}{\log \theta}$. (07 Marks)
- c. Find the Pedal equation to the curve $r = a(1 + \sin \theta)$. (07 Marks)
- 4 a. State and prove Euler's theorem of Homogeneous functions. (06 Marks)
- b. If $u = f(x-y, y-z, z-x)$
P.T $\frac{\partial u}{\partial x} + \frac{\partial u}{\partial y} + \frac{\partial u}{\partial z} = 0$. (07 Marks)
- c. If $u = \tan^{-1} x + \tan^{-1} y$, $V = \frac{x+y}{1-xy}$
S.T $\frac{\partial(u,v)}{\partial(x,y)} = 0$. (07 Marks)
- 5 a. Obtain the Reduction formula for $\int \sin^m x \cos^n x \, dx$. Where m, n are positive integers. (07 Marks)
- b. Evaluate $\int_1^2 \int_0^{2-x} xy \, dx \, dy$. (06 Marks)
- c. Evaluate $\int_0^3 \int_0^2 \int_0^1 (x+y+z) \, dz \, dx \, dy$. (07 Marks)
- 6 a. Prove that $\Gamma\left(\frac{1}{2}\right) = \sqrt{\pi}$. (06 Marks)
- b. Prove that $\int_0^c x^2 e^{-x^2} \, dx \times \int_0^c e^{-x^2} \, dx = \frac{\pi}{8\sqrt{2}}$. (07 Marks)

Important Note : 1. On completing your answers, compulsorily draw diagonal cross lines on the remaining blank pages.
2. Any revealing of identification, appeal to evaluator and/or equations written eg. 42+8 = 50, will be treated as malpractice.

- c. Evaluate the Integral $\int_0^1 x^5(1-x)^6 dx$. (07 Marks)
- 7 a. Solve $(D^3 - 3D - 2)y = 0$. (06 Marks)
b. Solve $(y'' + y) = e^{-x} + \cos x + x^3$. (07 Marks)
c. Solve $y'' - 2y' + y = xe^x \sin x$. (07 Marks)
- 8 a. Solve $\frac{dy}{dx} = \frac{x(2 \log x + 1)}{\sin y + y \cos y}$. (06 Marks)
b. Solve $x \log x \frac{dy}{dx} + y = 2 \log x$. (07 Marks)
c. Solve $(2xy + y - \tan y) dx + (x^2 - x \tan^2 y + \sec^2 y) dy = 0$. (07 Marks)

SKIT LIBRARY